

Pennies issue.

Contents:

3 worksheets from easy to difficult.











1 answer sheet.



vanjufmarjan.nl











Pennies issue

Add up the bills and coins and calculate how much money is being paid and fill it in. Then check your answers with the answer sheet.

1 	2 
3 	4 
5 	6 
7 	8 
9 	10 
Worksheet - 1	











Pennies issue

Add up the bills and coins and calculate how much money is being paid and fill it in. Then check your answers with the answer sheet.

11  <input type="text"/>	12  <input type="text"/>
13  <input type="text"/>	14  <input type="text"/>
15  <input type="text"/>	16  <input type="text"/>
17  <input type="text"/>	18  <input type="text"/>
19  <input type="text"/>	20  <input type="text"/>
Worksheet - 2	

Pennies issue

Add up the bills and coins and calculate how much money is being paid and fill it in. Then check your answers with the answer sheet.

21  <input type="text"/>	22  <input type="text"/>
23  <input type="text"/>	24  <input type="text"/>
25  <input type="text"/>	26  <input type="text"/>
27  <input type="text"/>	28  <input type="text"/>
29  <input type="text"/>	30  <input type="text"/>
Worksheet - 3	

Pennies issue

Answer sheet

I	€ 2,40	II	€ 12,65	2I	€ 46,15
2	€ 3,75	12	€ 18,40	22	€ 61,25
3	€ 5,10	13	€ 10,05	23	€ 33,70
4	€ 8,90	14	€ 20,35	24	€ 9,45
5	€ 4,60	15	€ 26,00	25	€ 88,30
6	€ 1,15	16	€ 16,80	26	€ 42,95
7	€ 6,30	17	€ 21,30	27	€ 58,10
8	€ 7,70	18	€ 15,55	28	€ 71,2
9	€ 9,55	19	€ 13,30	29	€ 36,60
10	€ 1,65	20	€ 24,05	30	€ 53,35